


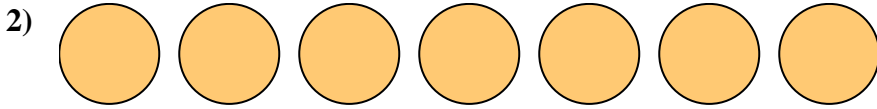


Write the shaded amount as a fraction.


Answers



1. \_\_\_\_\_

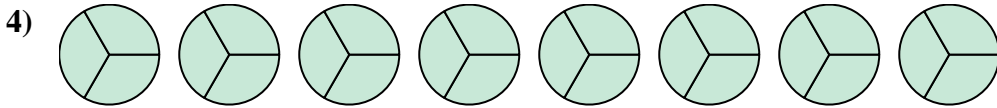


2. \_\_\_\_\_

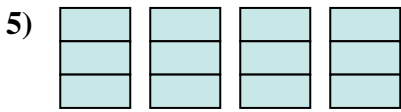


3. \_\_\_\_\_

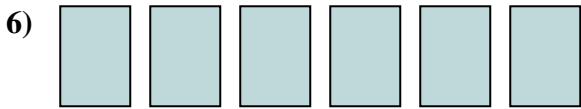
4. \_\_\_\_\_



5. \_\_\_\_\_

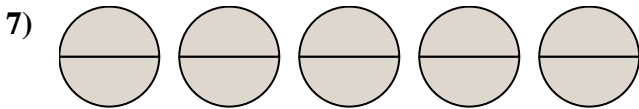


6. \_\_\_\_\_



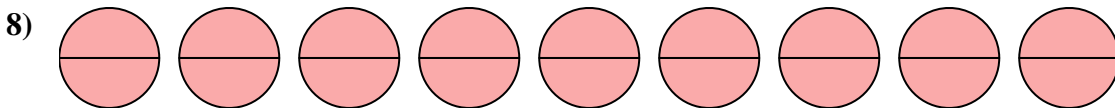
7. \_\_\_\_\_

8. \_\_\_\_\_

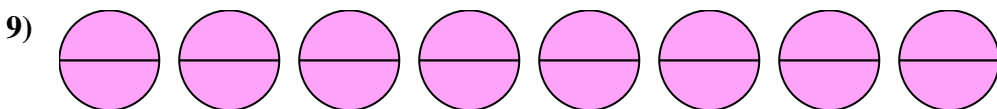


9. \_\_\_\_\_

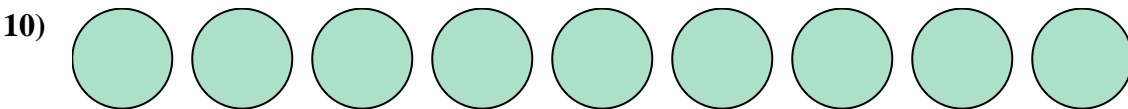
10. \_\_\_\_\_



11. \_\_\_\_\_

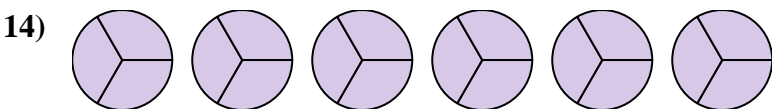
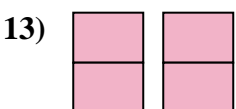

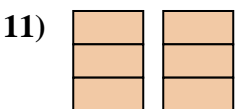


12. \_\_\_\_\_



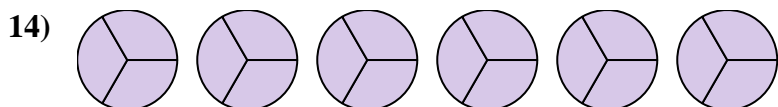
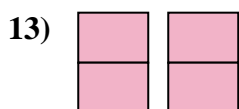

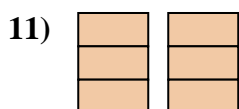
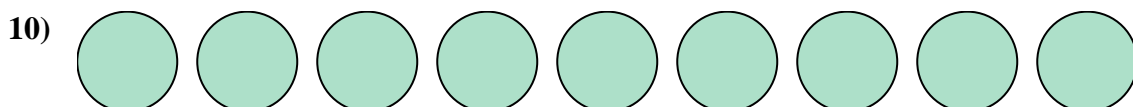
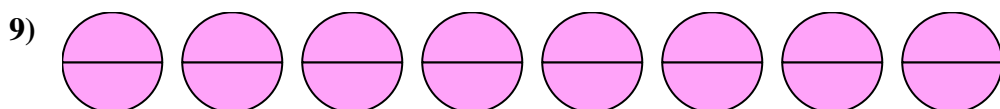
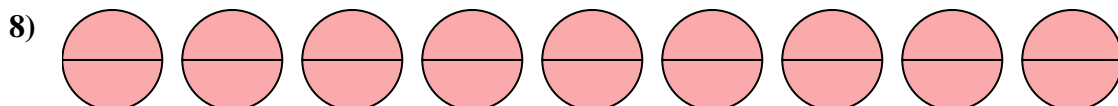
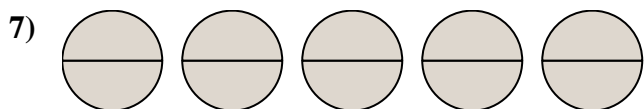
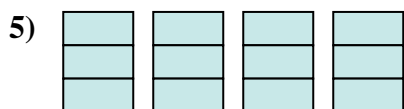
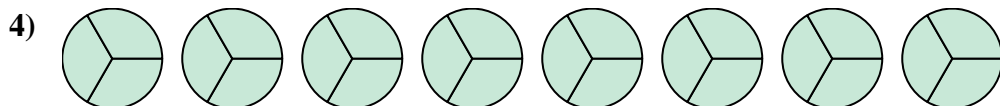

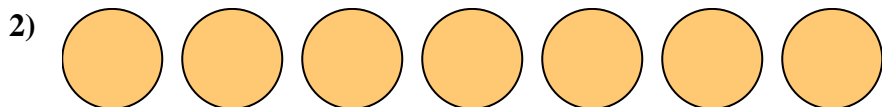
13. \_\_\_\_\_

14. \_\_\_\_\_





Write the shaded amount as a fraction.



Answers

1.  $\frac{12}{2}$

2.  $\frac{7}{1}$

3.  $\frac{4}{1}$

4.  $\frac{24}{3}$

5.  $\frac{12}{3}$

6.  $\frac{6}{1}$

7.  $\frac{10}{2}$

8.  $\frac{18}{2}$

9.  $\frac{16}{2}$

10.  $\frac{9}{1}$

11.  $\frac{6}{3}$

12.  $\frac{3}{1}$

13.  $\frac{4}{2}$

14.  $\frac{18}{3}$